


5.3 day 5 Worksheet (5D)

Graph the following equations using the given table.


1. $y = x + 3$

x		y
-2		
0		
2		




2. $y = -2x + 4$

x		y
-2		
0		
2		




3. $y = -3x + 5$

x		y
-3		
0		
3		




4. $y = 5 - x$

x		y
-1		
0		
1		




5. $x + y = 2$

x		y
-1		
0		
1		




6. $3x + y = 9$

x		y
-2		
0		
2		



7. $4x + y = -8$

x		y
-1		
0		
1		



8. $y - 3x = -1$

x		y
-2		
0		
2		

